

1. Look at the picture carefully and count and write the number of objects given below.




- Apples
- Children
- Birds
- Coconuts
- Boat




2. Count the object and write the numbers.

<p>1)</p> <p>How many? _____</p>	<p>2)</p> <p>How many? _____</p>
<p>3)</p> <p>How many? _____</p>	<p>4)</p> <p>How many? _____</p>
<p>5)</p> <p>How many? _____</p>	<p>6)</p> <p>How many? _____</p>




3.Count the number of groups and fill in the blanks.



_____ groups of _____ apples.




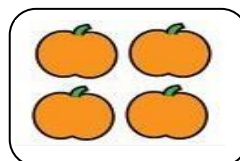
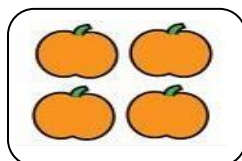
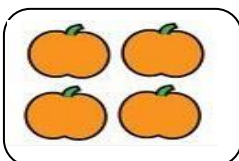
_____ groups of _____ stars.



_____ groups of _____ mangoes.



_____ groups of _____ ice-creams.



_____ groups of _____ pumpkins.

4. Match the columns.

A. 80 chikoos



B. 72 chikoos



C. 56 chikoos

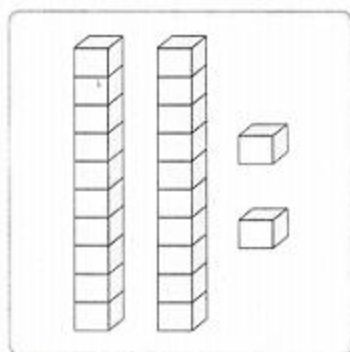


D. 28 chikoos



5. Count and write.

a)

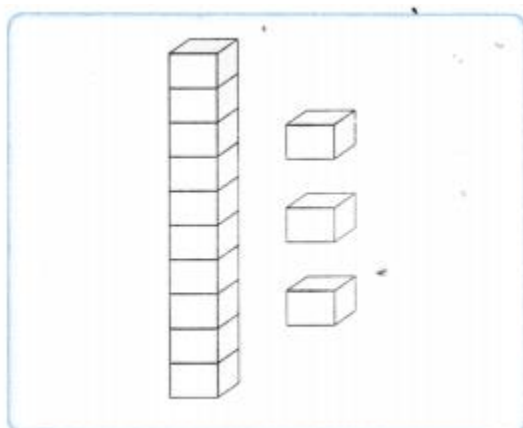


block sticks and

blocks

Total blocks =

b)

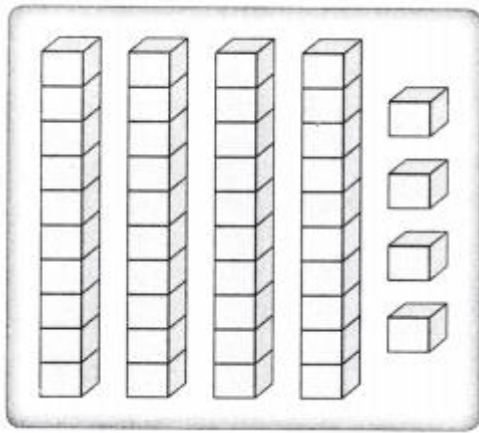


block sticks and

blocks

Total blocks =

c)




block sticks and

blocks

Total blocks =

d)





_____ ten strips

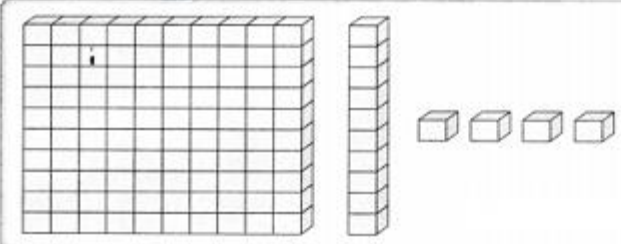
_____ unit

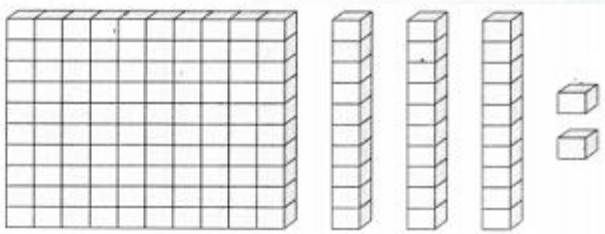
Total unit = _____

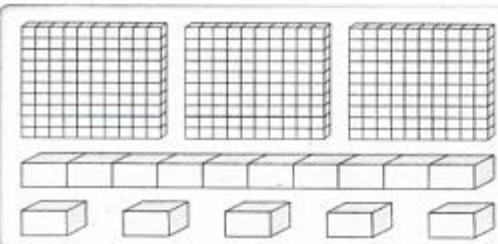
6. Complete the below table.

Total blocks/ units	Ten strips 	Units 
24		
36		
72		
69		
46		

7. Circle the correct number.

(i)  132 114
100 150

(ii) 130 613  132 140

(iii)  300 310
320 315

8. Write the numbers in their short form.

a) 3 tens 5 ones =

b) 9 tens 6 ones =

c) 6 tens =

d) 2 tens 8 ones =

e) 4 tens 3 ones =

f) 7 tens =

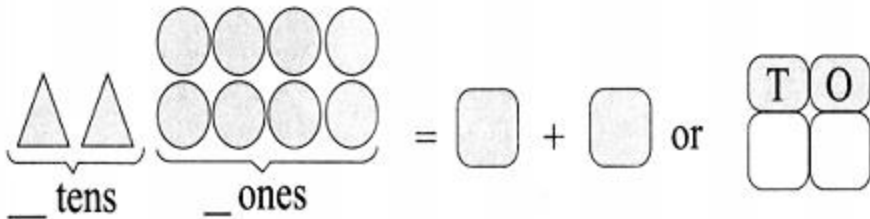
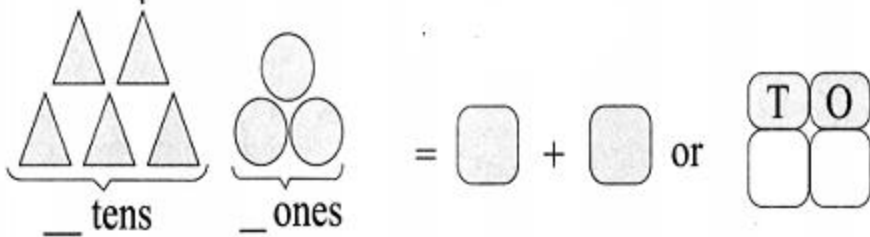
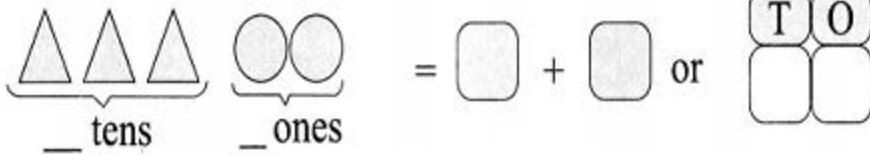
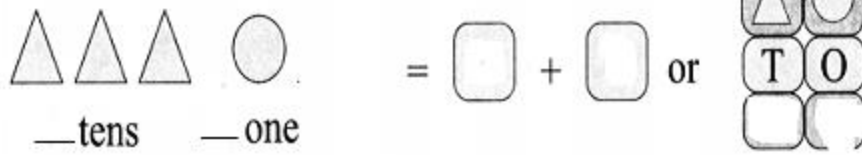
g) 8 tens 7 ones =

h) 5 tens 5 ones =

i) 3 tens 9 ones =

j) 6 tens 2 ones =

9. Complete the following.



10. Fill in the blanks.

- _____ is more than 20.
- _____ is less than 35.
- _____ is more than 78.
- 56 is more than _____.
- 47 is less than _____.
- _____ is less than 2.
- 39 is more than _____.
- 49 is more than _____.
- _____ is more than 72.

11. Fill in the blanks with less or more.

a) 99 is ____ than 100.

b) 100 is ____ than 59.

c) 66 is ____ than 87.

d) 31 is ____ than 43.

e) 47 is _____ than 71.

f) 24 is _____ than 21.

g) 76 is _____ than 65.

12. Rewrite the following number in ascending order.

a) 61 , 32 , 45 , 68 , 15

b) 50 , 30 , 10 , 60 , 70

13. Rewrite the following number in descending order.

a) 23 , 54 , 11 , 76 , 22

b) 13 , 98 , 34 , 76 , 54